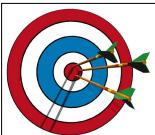


Unit 5 - 5.6, 5.7, & 5.8



## Slope Intercept Form

Today's Learning Targets:

5.6 - I can graph a line by using slope-intercept form ( $y=mx+b$ ).

5.7 - I can write an equation in slope-intercept form from a graph.

5.8 - I can explain what  $m$  and  $b$  represent on the graph from the equation  $y=mx+b$ .

---

---

---

---

---

---

---

---

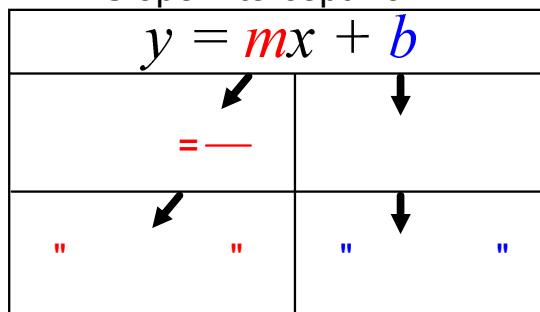
---

---

---

---

## Slope Intercept Form




---

---

---

---

---

---

---

---

---

---

---

---

What is the **slope** ( $m$ ) and **y-intercept** ( $b$ ) of the equations?

$y = 5x - 2$        $m =$        $b =$

$y = -\frac{1}{2}x + \frac{2}{3}$        $m =$        $b =$

$y = 14 - 3x$        $m =$        $b =$

$y = 4x$        $m =$        $b =$

$y = -7$        $m =$        $b =$

---

---

---

---

---

---

---

---

---

---

---

---

Unit 5 - 5.6, 5.7, & 5.8

What is the equation for a line with slope  $^{-4}/_5$  and y-intercept 7?

$$y = \underline{\quad} x + \underline{\quad}$$

What is an equation of a line with slope  $^{3}/_2$  and y-intercept -1?

$$y = \underline{\quad} x \underline{\quad}$$

---

---

---

---

---

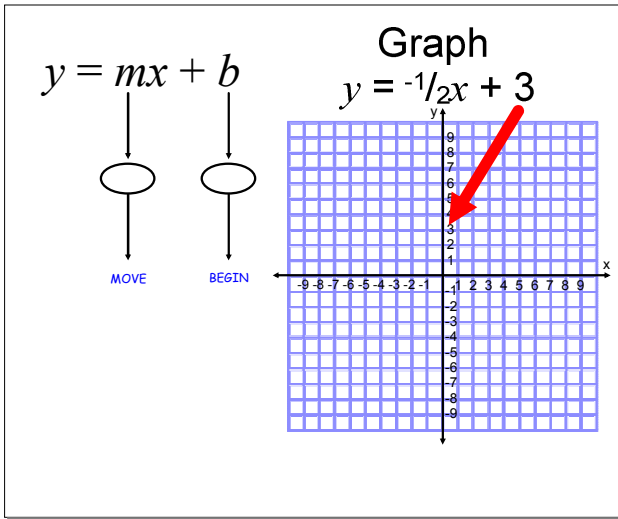
---

---

---

---

---



---

---

---

---

---

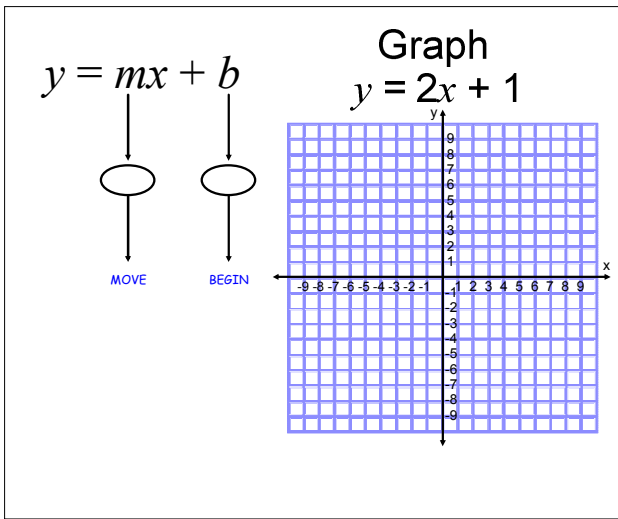
---

---

---

---

---



---

---

---

---

---

---

---

---

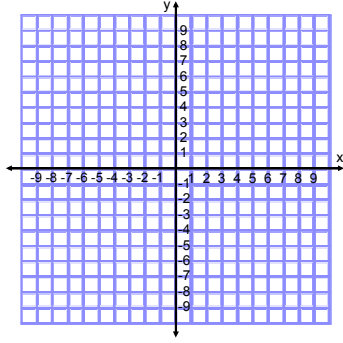
---

---

Unit 5 - 5.6, 5.7, & 5.8

Graph the equation using slope and intercept.

$$y = -x + 2$$




---

---

---

---

---

---

---

---

---

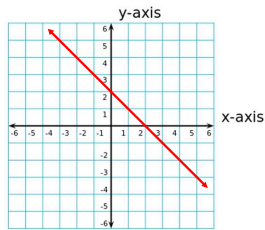
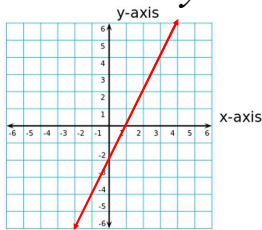
---

---

---

Write an equation for the lines.

$$y = mx + b$$



$m = \underline{\quad}$   
 $b = \underline{\quad}$   $y = \underline{\quad}$

$m = \underline{\quad}$   
 $b = \underline{\quad}$   $y = \underline{\quad}$

---

---

---

---

---

---

---

---

---

---

---

---