

Quiz Review – Slope Intercept Form

Name _____ Hr _____

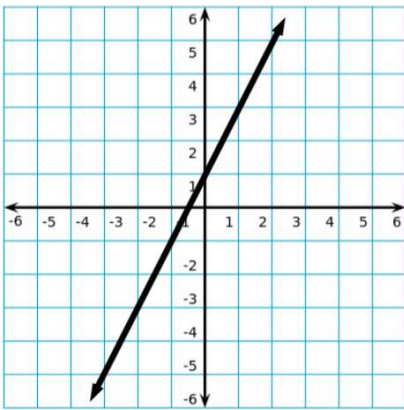
$$y = mx + b$$

Identify m and b. Rearrange to Slope-intercept form if necessary.

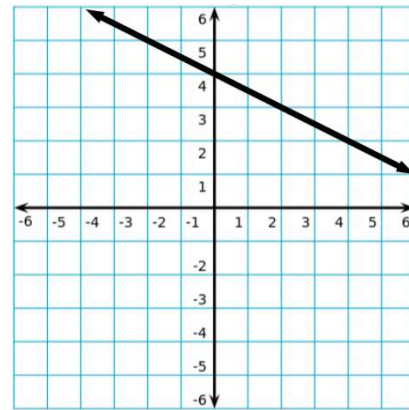
1. $y = 3x + 7$	2. $y + 15 = x$	3. $y + \frac{1}{4}x = 6$	4. $y = -4$
$m =$ _____	$m =$ _____	$m =$ _____	$m =$ _____
$b =$ _____	$b =$ _____	$b =$ _____	$b =$ _____

Write the equation in slope-intercept form for each line.

5.



6.

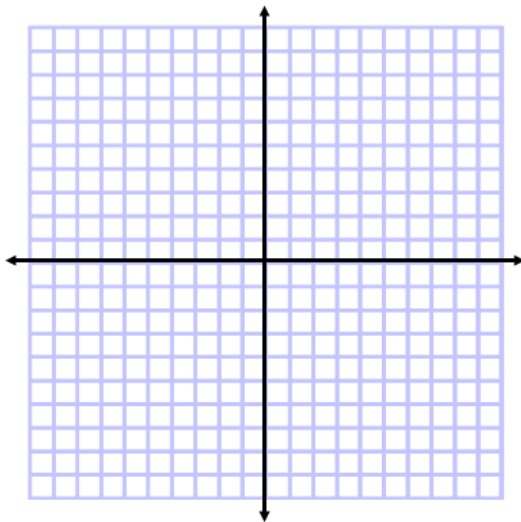


Graph each equation. Rearrange to Slope-Intercept Form if necessary. Identify m and b.

7. $y = 3x$

$m =$

$b =$



8. $y = 2x + 4$

$m =$

$b =$

